


Fractions

Colorie chaque figure comme l'indique la fraction :

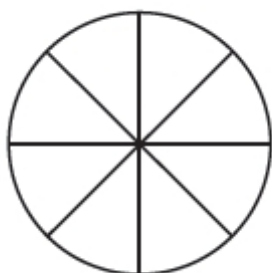
1.

$$\frac{4}{7} =$$



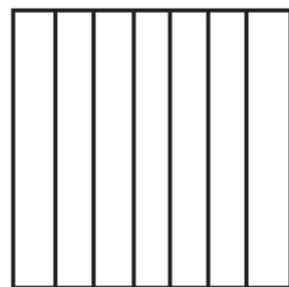
2.

$$\frac{2}{8} =$$



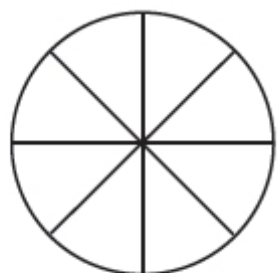
3.

$$\frac{3}{7} =$$



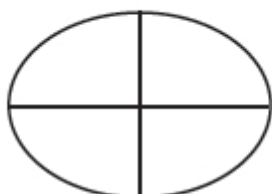
4.

$$\frac{5}{8} =$$



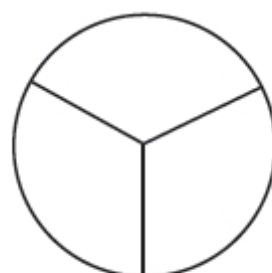
5.

$$\frac{4}{4} =$$



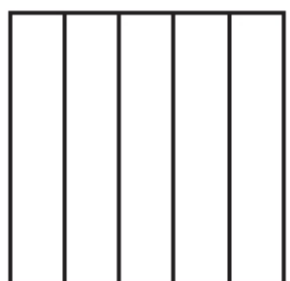
6.

$$\frac{1}{3} =$$



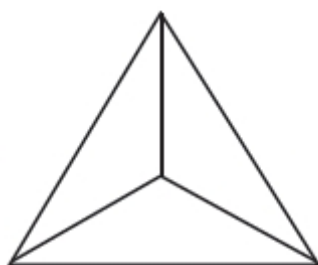
7.

$$\frac{2}{5} =$$



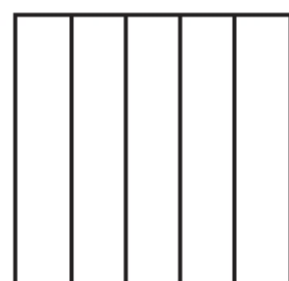
8.

$$\frac{2}{3} =$$



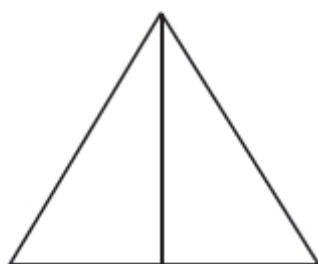
9.

$$\frac{1}{5} =$$



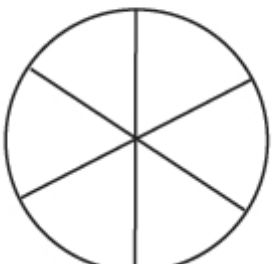
10.

$$\frac{1}{2} =$$



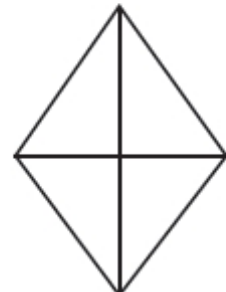
11.

$$\frac{5}{6} =$$



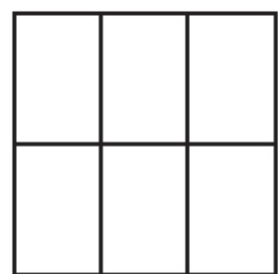
12.

$$\frac{3}{4} =$$



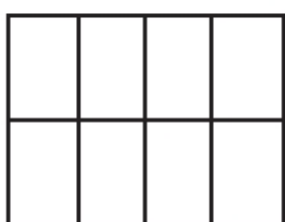
13.

$$\frac{3}{6} =$$



14.

$$\frac{3}{8} =$$

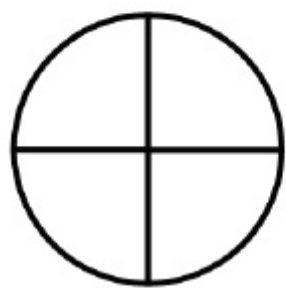


15.

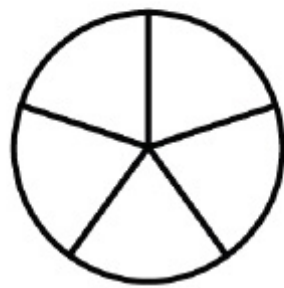
$$\frac{6}{6} =$$



Fractions



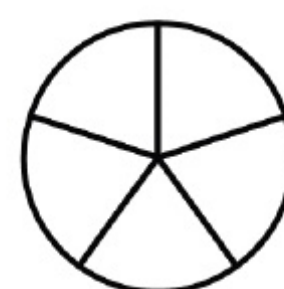
Colorie $\frac{1}{4}$



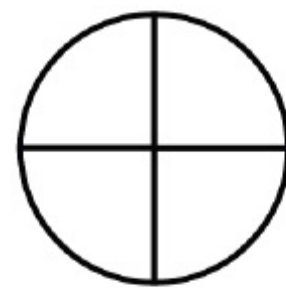
Colorie $\frac{2}{5}$



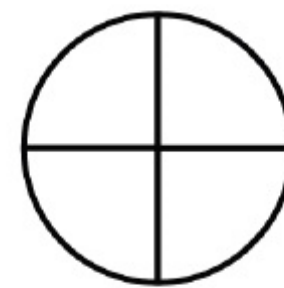
Colorie $\frac{1}{3}$



Colorie $\frac{1}{5}$



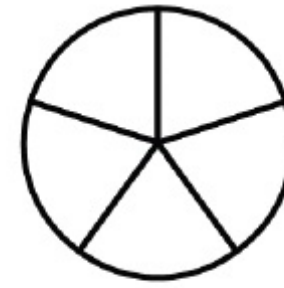
Colorie $\frac{2}{4}$



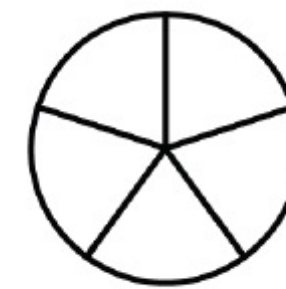
Colorie $\frac{3}{4}$



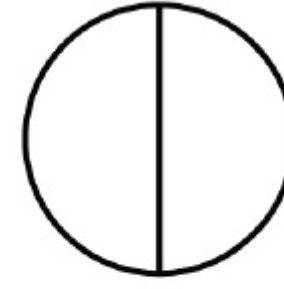
Colorie $\frac{2}{3}$



Colorie $\frac{4}{5}$

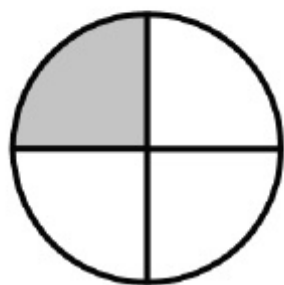


Colorie $\frac{3}{5}$

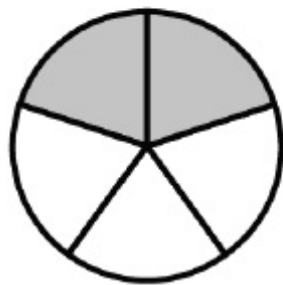


Colorie $\frac{1}{2}$

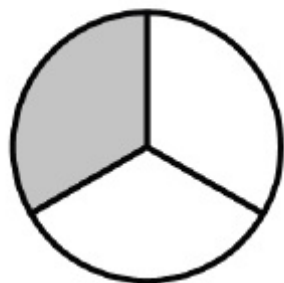
Indique la fraction qui correspond à la partie coloriée :



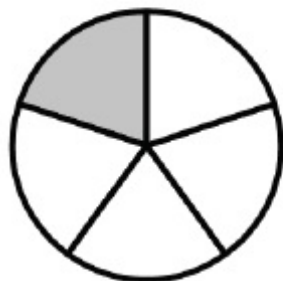
$$\frac{1}{4}$$



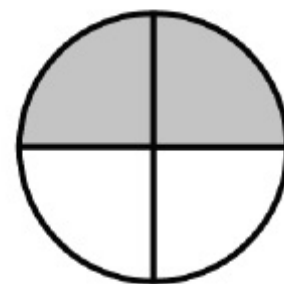
—



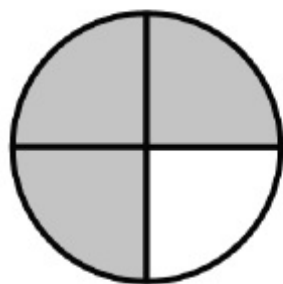
—



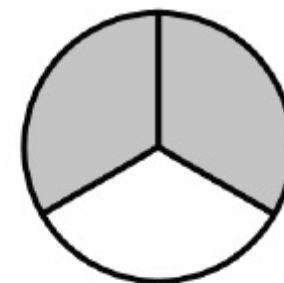
—



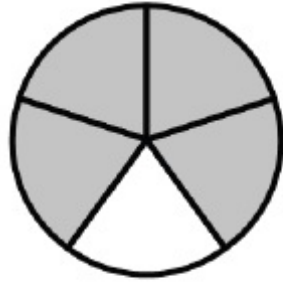
—



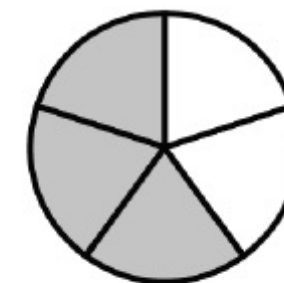
—



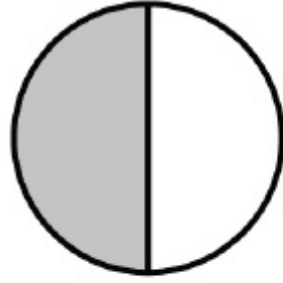
—



—



—



—